

October 29, 2018, Monday

20. Find angles 1 and 2.

360
 -105
 $=255$
 $\div 2$
 $=127.5$

126
 -55
 $=71$

$\angle 1 = 55^\circ$
 $\angle 2 = 37.5$

$\angle = \frac{1}{2} (\text{int. arc} - \text{ext. arc})$
 $\angle 2 = \frac{1}{2} (130 - 55)$

If $m\angle ABC = 63^\circ$, find all three arc measures.

21. $\widehat{AB} = 180^\circ$, 22. $\widehat{BC} = 54^\circ$, 23. $\widehat{AC} = 126^\circ$

180
 -63
 $=117$
 $\div 2$
 $=58.5$

180
 -63
 -90
 $=27$

diameter/line

Oct 26-8:13 AM

Discuss - draw

What are the 5 circle - angle arc formulas you know?

- 1
- 2
- 3
- 4
- 5

Oct 26-8:41 AM

What is a chord? A line that touches the circumference of a circle two times.

Draw a circle with two intersecting chords: **CHORDS AD & BC**

What is a secant segment? A line that passes through the circumference 2 times.

Draw a circle with 2 secant segments which intersect outside the circle: **SECANTS: EF, GH**

What is a tangent segment? A line that touches a circle at only one point.

Draw a circle with a secant segment and a tangent segment which intersect outside the circle: **SECANT IS JK, TANGENT IS LM**

Oct 26-2:56 PM

Geometry - Circles & chords, secants, tangents

Chord-Chord Product Theorem
 If two chords intersect inside a circle, then the products of the lengths of the segments of the chords are equal.

Secant-Secant Product Theorem
 If two secants intersect in the exterior of a circle, then the product of the lengths of one secant segment and its external segment equals the product of the lengths of the other secant segment and its external segment.

Secant-Tangent Product Theorem
 If a secant and a tangent intersect in the exterior of a circle, then the product of the lengths of the secant segment and its external segment equals the length of the tangent segment squared.

Oct 26-8:38 AM

Geometry Circles, Chords & Secants

Solve for x. Assume that lines which appear tangent are tangent.

- 1) $x = 14$
- 2) $x = 27$
- 3) $x = 6$
- 4) $x = 4$
- 5) $x = 270$
- 6) $x = 10$
- 7) $x = 14$
- 8) $x = 14$
- 9) $x = 10$
- 10) $x = 10$
- 11) $x = 14$
- 12) $x = 14$

$(x+18)18 = (30)^2$
 $18x + 324 = 900$
 $-324 \quad -324$
 $18x = 576$
 $\div 18 \quad \div 18$
 $x = 32$

Oct 26-8:38 AM

- 9)
- 10)
- 11)
- 12)

Oct 30-10:28 AM

Geometry Name _____ ID: 1
 Circles, Chords & Secants Date _____ Period _____

Solve for x. Assume that lines which appear tangent are tangent.

1) 27 2) 12
 3) 4 4) 15
 5) 21 6) 6
 7) 10 8) 6
 9) 16 10) 5
 11) 32 12) 14

© 2014 Kean Software LLC. All rights reserved. Made with Testville Software.

Oct 26-11:09 AM

October 30, 2018, Tuesday

From you notes - write one of the 'new' circle rules we covered yesterday (circles with chords, secants, and tangents).

Oct 26-8:23 AM

Geometry Name _____ ID: 1
 Find the correct Circle Chord & Secant Rule Date _____ Period _____

Solve for x. Assume that lines which appear tangent are tangent.

1) 2) 3) 4) 5) 6) 7) 8) 9) 10)

© 2014 Kean Software LLC. All rights reserved. Made with Testville Software.

Oct 26-11:07 AM

Geometry Name _____ ID: 1
 Find the correct Circle Chord & Secant Rule Date _____ Period _____

Solve for x. Assume that lines which appear tangent are tangent.

1) 2) 3) 4) 5) 6) 7) 8) 9) 10) 11) 12)

© 2014 Kean Software LLC. All rights reserved. Made with Testville Software.

Oct 26-11:08 AM

<https://www.mathwarehouse.com/geometry/circle/tangent-secant-side-length.php>

Math Warehouse
 Math Gifts Algebra Geometry Trigonometry Calculus Teacher Tools

Side Length of Tangent & Secant of a Circle
 Tangents, secants, Side Lengths Theorems & Formula

Review the three rules, then try each problem BEFORE you look at the answer!

Oct 26-11:10 AM

October 31, 2018, Wednesday

Solve for x. Assume that lines which appear tangent are tangent.

1) $(x+4)4 = 6^2$
 $4x+16 = 36$
 $-16 = -16$
 $4x = 20$
 $x = 5$

2) $x \cdot 9 = 10 \cdot 18$
 $9x = 180$
 $x = 20$

3) $(x+6)6 = (11+7)7$
 $6x+36 = 126$
 $-36 = -36$
 $6x = 90$
 $x = 15$

You have 3 chord, secant, tangent rules relating to a circle... how will you remember these for the EOC?

Oct 26-8:23 AM

What is circumference? **The distance around a circle** 360°

Draw a pic of circumference.

Find C if $r = 2$. $C = 2\pi r$ **radius (Not the diameter)**

Circumference

What is $1/2$ of the circumference? $1/4$? $3/4$?

Whole $\bigcirc = 360^\circ$ $\frac{1}{2}(360) = 180^\circ$ $\frac{1}{4}(360) = 90^\circ$ $\frac{3}{4}(360) = 270^\circ$

How many degrees are $1/2$, $1/4$, $3/4$, & 1 around a circle?

Semi Circle \rightarrow

Look at p730 (copy) what is m ??

$r = \frac{d}{2}$
 $2r = d$

Oct 26-2:57 PM

Arc Length

The arc length, s , of an arc with measure m° and radius r is given by the formula $s = \frac{m}{360} \cdot 2\pi r$.

Ex

Find C:
 $C = 2\pi r$
 $C = 2\pi(2)$
 $C = 12.56$
 $S = \frac{m}{360} \cdot 2\pi r$
 $S = \frac{90}{360} \cdot 2\pi(2)$
 $S = 3.14$

$m =$ The measure of the arc in degree
 $C = 2\pi r$
 $S = \frac{m}{360} \cdot 2\pi r$
 "piece" of the circumference

Oct 26-2:54 PM

Geometry Name: _____ ID: 1

Circle circumference to arc length Date: _____ Period: _____

Find the diameter of each circle. Round your answer to the nearest tenth.

1) $3 + 3 = 6$ $2r = d$ $r = \frac{1}{2}d$

Find the radius of each circle. Round your answer to the nearest tenth.

2) $\frac{24}{2} = 12 = \text{radius}$

Find the circumference of each circle. Use your calculator's value of π . Round your answer to the nearest tenth.

3) $C = 2\pi r$
 $C = 2\pi(3)$
 $C = 18.8$

4) $r = 6.1$
 $C = 2\pi(6.1)$
 $C = 38.3$

Oct 26-11:15 AM

Find the length of each arc. Round your answers to the nearest tenth. Remember arc length is a "piece" of the circumference.

5) $S = \frac{m}{360} \cdot 2\pi r$
 $S = \frac{120}{360} \cdot 2\pi(11)$
 $S = 31.4$

6) $S = 61.8$

7) $S = 34.9$

8) $S = 69.8$

9) $S = 12.1$

10) $S = 24.2$

11) $S = 12.1$

12) $S = 31.4$

Oct 26-11:16 AM

Geometry Name: _____ ID: 1

Circle circumference to arc length Date: _____ Period: _____

Find the diameter of each circle. Round your answer to the nearest tenth.

1) 6 km

Find the radius of each circle. Round your answer to the nearest tenth.

2) 12 yd

Find the circumference of each circle. Use your calculator's value of π . Round your answer to the nearest tenth.

3) 36.8 km

4) 39.3 m

Oct 26-11:16 AM

Find the length of each arc. Round your answers to the nearest tenth. Remember arc length is a "piece" of the circumference.

5) 31.4 km

6) 62.8 km

7) 34.9 cm

8) 69.8 cm

9) 12.1 m

10) 24.2 m

11) 12.1 m

12) 31.4 cm

Oct 26-11:16 AM

November 1 2018, Thursday

What is area?



What if I want a piece of area?



Look at p 738 (copy). What is m?



Oct 26-8:23 AM



Oct 30-1:44 PM

Geometry _____ Name _____ ID: 1
 Circumference of a circle...what is 'part' of a circumference called?
 Find the circumference of each circle. $C = 2\pi r$. Round your answer to the nearest tenth.

1)  2) 



3)  4) 



5)  6) 



7)  8) 



© 2013 Holt Rinehart and Winston, LLC. All rights reserved. Made with Edmentum LMS.

Geometry _____ Name _____ ID: 1
 Circumference of a circle...what is 'part' of a circumference called?
 Find the circumference of each circle. $C = 2\pi r$. Round your answer to the nearest tenth.

1)  75.4 mi
 2)  25.1 cm

3)  14.5 km
 4)  59.1 m

5)  68.5 cm
 6)  56.5 in

7)  50.3 m
 8)  37.7 km

© 2013 Holt Rinehart and Winston, LLC. All rights reserved. Made with Edmentum LMS.

Oct 26-11:22 AM



Oct 26-11:23 AM



Area of a Sector



The area A of a sector with a central angle of m° of a circle with radius r is given by



$$A = \frac{m}{360} \cdot \pi r^2$$



Geometry _____ Name _____ ID: 1
 The sector...a piece of a circle
 Find the area of each sector. Round your answers to the nearest tenth.

1)  2) 

3)  4) 

5)  6) 

7)  8) 


9)  10) 


© 2013 Holt Rinehart and Winston, LLC. All rights reserved. Made with Edmentum LMS.


Oct 26-2:55 PM


Oct 26-11:27 AM


Geometry _____ Name _____ ID: 1
 The sector...a piece of a circle _____ Date _____ Period _____
 Find the area of each sector. Round your answers to the nearest tenth.


1)  265.1 m^2


2)  44.2 m^2


3)  117.8 cm^2


4)  282.7 cm^2


5)  150.8 m^2

6)  221.7 yd^2

7)  205.3 yd^2

8)  14.1 cm^2


9)  28.3 ft^2


10)  196.3 m^2

CGE GEOMETRY 4 | Page
 Scanned by CamScanner


Oct 26-11:27 AM

Unit 4 5G 2 - Segments, Sectors, Arc Length, Radians _____ Name _____ S _____
 Find the length of each missing sector, arc, or chord.


1) Find the length of \overline{AC} . 

2) Find the length of the missing segment. 

3) Find the length of the missing segment. $\overline{AC} = \underline{\hspace{2cm}}$

4) What is the length of each tangent? 

Missing segment length = _____ $\overline{AB} = \underline{\hspace{2cm}}, \overline{CB} = \underline{\hspace{2cm}}$


5) Solve for x. 


X = _____

CGE GEOMETRY 4 | Page
 Scanned by CamScanner


Oct 31-8:05 AM

Unit 4 5G 2 - Segments, Sectors, Arc Length, Radians _____ Name _____ S _____
 Find the length of each missing sector, arc, or chord.


1) Find the length of \overline{AC} . 

2) Find the length of the missing segment. 

3) Find the length of the missing segment. $\overline{AC} = \underline{\hspace{2cm}}$

4) What is the length of each tangent? 

Missing segment length = _____ $\overline{AB} = \underline{\hspace{2cm}}, \overline{CB} = \underline{\hspace{2cm}}$

5) Solve for x. 

X = _____

CGE GEOMETRY 4 | Page
 Scanned by CamScanner

Oct 31-8:05 AM

November 2, 2018, Friday

Quiz


Oct 26-8:23 AM


CCGPS Geometry _____ 4G - Circles and Volumes _____ 4.3 - Practice _____
 Name: _____ Date: _____
 What did the Mama Lion say when she saw her cub chasing a hunter around a tree?
 To find out, figure out the degree measure of each lettered angle and arc in the circles below. Then place the corresponding letter above each number.


203 66 19 60 37.5 76 129 107 135 60 25 51 203 37.5 100 25


135 107 66 105 35 129 66 48 76 66 107 107 66


170 105 37.5 129 19 135 107 203 129 66 48 81 96 66 66 35


 70°


 70°


 70°


 70°


 70°


 70°


 70°


 70°


 70°


 70°


 70°

 70°

 70°

 70°

 70°

 70°

CGE GEOMETRY 4 | Page
 Scanned by CamScanner

Oct 26-12:23 PM