

October 29, 2018, Monday

20. Find angles 1 and 2.

Handwritten calculations:
 $360 - 105 = 155$
 $155 - 130 = 25$
 $25 / 2 = 12.5$
 $\angle 1 = 55$
 $\angle 2 = 37.5$

21. If $m\angle ABC = 63^\circ$, find all three arc measures.

Handwritten calculations:
 $180 - 126 = 54$
 $54 / 2 = 27$
 $180 - 27 = 153$
 Note: diameter/line

Oct 26-8:13 AM

Discuss - draw

What are the 5 circle - angle arc formulas you know?

- 1
- 2
- 3
- 4
- 5

Oct 26-8:41 AM

What is a chord? A line that touches the circumference of a circle two times.

Draw a circle with two intersecting chords: CHORDS AD & BC

What is a secant segment? A line that passes through the circle circumference 2 times.

Draw a circle with 2 secant segments which intersect outside the circle: SECANTS: EF, GH

What is a tangent segment? A line that touches a circle at only one point.

Draw a circle with a secant segment and a tangent segment which intersect outside the circle: SECANT IS JK, TANGENT IS LM

Oct 26-2:56 PM

Geometry - Circles & chords, secants, tangents

Chord-Chord Product Theorem
 If two chords intersect inside a circle, then the products of the lengths of the segments of the chords are equal.

$AE \cdot EB = CE \cdot ED$

Secant-Secant Product Theorem
 If two secants intersect in the exterior of a circle, then the product of the lengths of one secant segment and its external segment equals the product of the lengths of the other secant segment and its external segment.

$AE \cdot BE = CE \cdot DE$

Secant-Tangent Product Theorem
 If a secant and a tangent intersect in the exterior of a circle, then the product of the lengths of the secant segment and its external segment equals the length of the tangent segment squared.

$AC \cdot BC = DC^2$

Oct 26-8:38 AM

Geometry Name: _____ ID: 1
 Circles, Chords & Secants Date: _____ Period: _____

Solve for x . Assume that lines which appear tangent are tangent.

- 1) $x = 14 = \frac{18 \cdot 21}{27}$
- 2) $9x = 16 \cdot 6$
 $x = \frac{36}{9} = 4$
- 3) $9x = 36$
 $x = 4$
- 4) $9x = 18 \cdot 9$
 $x = 18$
- 5) $9x = 36$
 $x = 4$
- 6) $9x = 18 \cdot 9$
 $x = 18$
- 7) $9x = 18 \cdot 9$
 $x = 18$
- 8) $9x = 18 \cdot 9$
 $x = 18$
- 9) $9x = 36$
 $x = 4$
- 10) $9x = 18 \cdot 9$
 $x = 18$
- 11) $9x = 36$
 $x = 4$
- 12) $9x = 18 \cdot 9$
 $x = 18$

Oct 26-8:38 AM

Geometry Name: _____ ID: 1
 Circles, Chords & Secants Date: _____ Period: _____

Solve for x . Assume that lines which appear tangent are tangent.

- 1) $9x = 36$
 $x = 4$
- 2) $9x = 18 \cdot 9$
 $x = 18$
- 3) $9x = 36$
 $x = 4$
- 4) $9x = 18 \cdot 9$
 $x = 18$
- 5) $9x = 36$
 $x = 4$
- 6) $9x = 18 \cdot 9$
 $x = 18$
- 7) $9x = 36$
 $x = 4$
- 8) $9x = 18 \cdot 9$
 $x = 18$
- 9) $9x = 36$
 $x = 4$
- 10) $9x = 18 \cdot 9$
 $x = 18$
- 11) $9x = 36$
 $x = 4$
- 12) $9x = 18 \cdot 9$
 $x = 18$

Oct 26-11:09 AM

October 30, 2018, Tuesday

From you notes - write one of the 'new' circle rules we covered yesterday (circles with chords, secants, and tangents).

Oct 26-8:23 AM

<https://www.mathwarehouse.com/geometry/circle/tangent-secant-side-length.php>

Math Warehouse

Chart Maker | Graphing Calculator | Math Worksheets

Math Gifts | Algebra | Geometry | Trigonometry | Calculus | Teacher Tools

Side Length of Tangent & Secant of a Circle
Tangents, secants, Side Lengths Theorems & Formula

Review the three rules, then try each problem BEFORE you look at the answer!

Oct 26-11:10 AM

October 31, 2018, Wednesday

Oct 26-8:23 AM

Geometry Name: _____ ID: 1
Find the correct Circle Chord & Secant Rule Date: _____ Period: _____

Solve for x . Assume that lines which appear tangent are tangent.

1) 2) 3) 4) 5) 6) 7) 8) 9) 10)

© 2018 Math Warehouse, LLC. All rights reserved. Made with The Math Learning Center.

Oct 26-11:07 AM

Geometry Name: _____ ID: 1
Find the correct Circle Chord & Secant Rule Date: _____ Period: _____

Solve for x . Assume that lines which appear tangent are tangent.

1) 2) 3) 4) 5) 6) 7) 8) 9) 10)

Answers: 1) 16, 2) 2, 3) 14, 4) 24, 5) 10, 6) 32, 7) 6, 8) 12, 9) 11, 10) 21

© 2018 Math Warehouse, LLC. All rights reserved. Made with The Math Learning Center.

Oct 26-11:08 AM

November 1 2018, Thursday

Oct 26-8:23 AM

What is circumference?
 Draw a pic of circumference.
 Find C if $r = 2$.
 What is 1/2 of the circumference? 1/4? 3/4?
 How many degrees are 1/2, 1/4, 3/4, & 1 around a circle?
 Look at p730 (copy) what is m ?
 What is area?
 What if I want a piece of area?
 Look at p 738 (copy). What is m ?

Arc Length
 The arc length, s , of an arc with measure m° and radius r is given by the formula $s = \frac{m}{360} \cdot 2\pi r$.

Oct 26-2:57 PM

Oct 26-2:54 PM

Geometry Name _____ ID: 1
 Circle circumference to arc length Date _____ Period _____
Find the diameter of each circle. Round your answer to the nearest tenth.

1)

Find the radius of each circle. Round your answer to the nearest tenth.

2)

Find the circumference of each circle. Use your calculator's value of π . Round your answer to the nearest tenth.

3) 4)

Oct 26-11:15 AM

Find the length of each arc. Round your answers to the nearest tenth. Remember arc length is a 'piece' of the circumference.

5) 6)

7) 8)

9) 10)

11) 12)

Oct 26-11:16 AM

Geometry Name _____ ID: 1
 Circle circumference to arc length Date _____ Period _____
Find the diameter of each circle. Round your answer to the nearest tenth.

1)

Find the radius of each circle. Round your answer to the nearest tenth.

2)

Find the circumference of each circle. Use your calculator's value of π . Round your answer to the nearest tenth.

3) 4)

Oct 26-11:16 AM

Find the length of each arc. Round your answers to the nearest tenth. Remember arc length is a 'piece' of the circumference.

5) 6)



7) 8)



9) 10)



11) 12)



Oct 26-11:16 AM

Geometry _____ Name _____ ID: 1
 Circumference of a circle...what is 'part' of a circumference called?
 Find the circumference of each circle. $C = 2\pi r$ Round your answer to the nearest tenth.

1)  2) 

3)  4) 



5)  6) 



7)  8) 



© 2014 Holt Rinehart and Winston. All rights reserved. Made with Infinite Geometry.



Oct 26-11:22 AM

Geometry _____ Name _____ ID: 1
 Circumference of a circle...what is 'part' of a circumference called?
 Find the circumference of each circle. $C = 2\pi r$ Round your answer to the nearest tenth.

1)  75.4 mi 2)  25.1 cm

3)  14.5 km 4)  59.1 m

5)  68.5 cm 6)  56.5 in

7)  50.3 m 8)  37.7 km

© 2014 Holt Rinehart and Winston. All rights reserved. Made with Infinite Geometry.

Oct 26-11:23 AM



Area of a Sector



The area A of a sector with a central angle of m° of a circle with radius r is given by



$$A = \frac{m}{360} \cdot \pi r^2$$



Oct 26-2:55 PM



Geometry _____ Name _____ ID: 1
 Date _____ Period _____
 The sector...a piece of a circle
 Find the area of each sector. Round your answers to the nearest tenth.

1)  2) 

3)  4) 

5)  6) 



7)  8) 



9)  10) 



© 2014 Holt Rinehart and Winston. All rights reserved. Made with Infinite Geometry.



Oct 26-11:27 AM



Geometry _____ Name _____ ID: 1
 Date _____ Period _____
 The sector...a piece of a circle
 Find the area of each sector. Round your answers to the nearest tenth.

1)  265.1 in² 2)  44.2 m²

3)  117.8 cm² 4)  262.7 cm²

5)  150.8 in² 6)  221.7 in²

7)  205.3 yd² 8)  14.1 cm²

9)  28.3 ft² 10)  196.3 m²

© 2014 Holt Rinehart and Winston. All rights reserved. Made with Infinite Geometry.

Oct 26-11:27 AM

November 2, 2018, Friday

Oct 26-8:23 AM



Oct 26-12:23 PM