

May 13, 2019, Monday

On-level Geometry Final Exam Study Guide

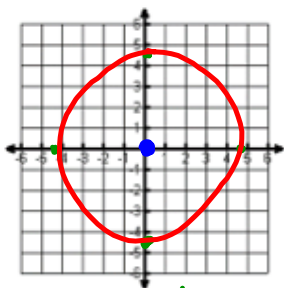
Name _____ S _____

Graph the following circles. State the center and radius.

1) $x^2 + y^2 = 20$

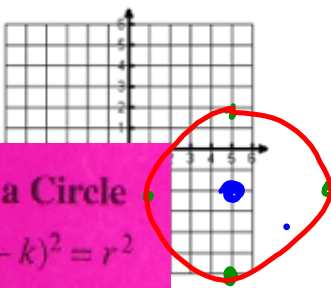
$\sqrt{r^2} = \sqrt{20}$
 $r = 4.5$

Center: (0,0) & Radius: 4.5




2) $(x-5)^2 + (y+2)^2 = 16$

Center: (5,-2) & Radius: 4



$\sqrt{r^2} = \sqrt{16}$
 $r = 4$



Equation of a Circle

$(x-h)^2 + (y-k)^2 = r^2$

Write the standard equation for the circle. State the center and radius.

3) $x^2 + y^2 - 14x + 4y - 11 = 0$

$x^2 - 14x + y^2 + 4y = 11$
 $(x-7)^2 + (y+2)^2 = 11 + 4$
 $(x-7)^2 + (y+2)^2 = 15$

4) $x^2 + y^2 - 8x + 4y - 6 = 0$

$x^2 - 8x + y^2 + 4y = 6$
 $(x-4)^2 + (y+2)^2 = 6 + 14$
 $(x-4)^2 + (y+2)^2 = 20$

1) group the x's, y's & move the constant ✓

2) complete the square for the x's & y's ✓

3) keep the equation balanced.

<https://www.mathplayground.com/division01.html>

<https://www.mathplayground.com/division01.html>



Computation Practice

Division Facts

$$\begin{array}{r} \\ 9 \overline{) 36} \\ \underline{27} \\ 9 \end{array}$$

Correct Answer:

Start

IXL Learning, Inc [US] <https://www.multiplication.com/quiz/division-self-correcting-quizzes>

Enter answer with keyboard or touch pad

Large Equation
Small Answer

Advertisement

Division Equation Family Quizzes

(All equations for the fact group)

Pre-Test	Ones	Twos	Threes	Fours	Fives
Pre-Test	1	2	3	4	5
Sixes	Sevens	Eights	Nines	Post-Test	Post-Test
6	7	8	9	Post-Test	Post-Test

Division Up Through Quizzes

(All equation UP THROUGH the fact group)

Pre-Test	Ones	Twos	Threes	Fours	Fives
Pre-Test	1	2	3	4	5
Sixes	Sevens	Eights	Nines	Post-Test	Post-Test
6	7	8	9	Post-Test	Post-Test

①

② If you were having trouble select the correct # to practice, if no trouble

May 14, 2019, Tuesday

- 5) A circular disk drive has a diameter with endpoints at $(-9, 2)$ and $(15, 12)$. Find the center and radius of the disk drive. Write the equation of the circle in standard form, then convert it to general form.
- 6) Find the point that partitions the line segment in a 1:1 ratio with endpoints $(8, 4)$ and $(-5, -7)$.
- 7) Find the perimeter of the triangle with the vertices $(-3, 2)$, $(1, -5)$, and $(5, 4)$.

<http://www.thegreatmartinicompany.com/Math-Quick-Quiz/division-quiz.html>

Famous Mathematicians selections

Pick 4 names of mathematics you would be interested in performing research on for the "Famous Mathematicians" project.

Write the numbers 1-4 on your hand out and return to me!

Division Quiz

1. $28 \div 4 = \square \square$

11. $77 \div 7 = \underline{\quad}$

2. $48 \div 12 = \underline{\quad}$

12. $108 \div 9 = \underline{\quad}$

3. $24 \div 6 = \underline{\quad}$

13. $56 \div 7 = \underline{\quad}$

4. $48 \div 6 = \underline{\quad}$

14. $32 \div 8 = \underline{\quad}$

15. $20 \div 4 = \underline{\quad}$

6. $12 \div 6 = \underline{\quad}$

16. $14 \div 2 = \underline{\quad}$

7. $90 \div 9 = \underline{\quad}$

17. $66 \div 6 = \underline{\quad}$

8. $10 \div 5 = \underline{\quad}$

18. $1 \div 1 = \underline{\quad}$

9. $35 \div 5 = \underline{\quad}$

19. $18 \div 6 = \underline{\quad}$

10. $40 \div 8 = \underline{\quad}$

20. $27 \div 9 = \underline{\quad}$

Famous Mathematicians

Brahmagupta	Madhava
Carl Friedrich Gauss	Pierre de Fermat
Charles Babbage	Pythagoras
Diophantus	Rene Descartes
Emmy Noether	Sophie Germain
Euclid	Thales
Fibonacci	Benjamin Banneker
George Boole	Charles Lewis Reason
Gottfried Leibniz	Kelly Miller
Grace Murray Hopper	Dudley Weldon Woodard
Isaac Newton	Martha Euphemia Lofton Haynes
John von Neumann	Elbert Frank Cox
John Wallis	William Waldron Schieffelin Claytor
Julia Robinson	Marjorie Lee Browne
Leonhard Euler	David Harold Blackwell
Luca Pacioli	

1) Select your top four name you are interested in learning more about.

2) I will (hopefully) choose one of your four to assign to you, so we can learn as about as many mathematicians as possible.

May 15, 2019, Wednesday

Change the following equations to general form of a circle, making sure it's in the correct order.

8) $(x - 4)^2 + (y - 1)^2 = 9$

9) $(x - 3)^2 + (y + 8)^2 = 25$

10) Find the equation of a line that is parallel to $y = -\frac{3}{2}x + 3$ and passes through $(-4, 5)$.

11) Find the equation of a line that is perpendicular to $y = \frac{1}{3}x - 7$ and passes through $(12, -6)$.

12) Circle C has a center of $(3, 4)$ and a radius of 5. Does the point $(0, 10)$ lie on circle C? Show your evidence (work).

Assign Famous Mathematicians

3) You will research the name you have been assigned to learn at least the following:

Date of birth

Date of death

Birthplace

Location lived as an adult

Where they died

Picture

Family structure (parents, husband/wife, children, etc.)

What was this person's biggest contribution to the field of mathematics?

What are three interesting facts about this person (not included in the above information).

4) You may present your information in the form of:

PowerPoint Slides, these will have to be printed for display

Word Documents, these will have to be printed for display

Legibly handwritten on large paper or multiple sheets

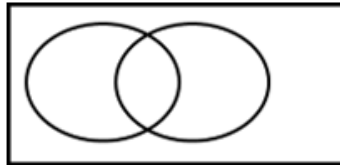
**Your work will be displayed for other to read about your mathematician, so make sure your work is neat.

5) When you have completed you research, see me, so we can find a place on the wall to display your work! Include your name visibly on each page displayed!

May 16, 2019, Thursday

Probability Review: Venn Diagrams, Tables, & Words

- **Event A:** Gale, Allen, & Dante like scary movies
- **Event B:** Allen, Tim & Laura like comedy movies
- Gina & Kellie don't prefer either of those 2 types



- 13) List the **possible outcomes**, or *sample space* for $A \cup B$. _____
- 14) List the **outcomes** for $A \cap B$. _____
- 15) List the **outcomes** for A' . _____
- 16) Find $P(B)$ _____ 17) Find $P(\overline{A \cup B})$ _____ 18) Find $P(A \cap B)$ _____

Display Famous Mathematicians

May 17, 2019, Friday

The table below represents a table about upperclassmen's suggestions for a class activity.

- 19) Find $P(11\text{th})$ _____
- 20) Find $P(\text{Dance})$ _____
- 21) Find $P(10\text{th} \cup \text{Dance})$ _____
- 22) Find $P(\text{Field Trip} \cap 11\text{th})$ _____
- 23) Find $P(\overline{12\text{th}} \cap \text{Talent Show})$ _____
- 24) Find $P(10\text{th} | \text{Field Trip})$ _____
- 25) Find $P(\text{Talent Show} | 10\text{th})$ _____

	Talent Show	Field Trip	Dance
10 th	4	8	2
11 th	5	3	6
12 th	2	1	9

Mutually Exclusive vs Overlapping

- 26) Which of the following are **mutually exclusive**?
 - A. Choosing a King or a Diamond in a deck of cards
 - B. Choosing a band student or math student in a classroom
 - C. Rolling 2 dice and getting an even sum or a sum less than 7
 - D. Choosing a Jack or a 5 in a deck of cards

Amusement Park Project

