

May 6, 2019, Monday

Multiple Choice

Identify the choice that best completes the statement or answers the question.

Write an equation of the line with the given slope and y-intercept

1. slope: 1, y-intercept: 10

a. $y = -\frac{4}{3}x + 10$

c. $y = x + 10$

b. $y = x - 10$

d. $y = -x + 10$

Write a linear equation in slope-intercept form to model the situation.

2. An icicle is 12 inches long and melts at a rate of $\frac{1}{4}$ inch per hour.

a. $L = 12 - \frac{1}{4}t$

c. $L = 12 - 4t$

b. $L = \frac{1}{4} - 12t$

d. $t = 12 - \frac{1}{4}L$

May 7, 2019 Tuesday

Write each equation in standard form.

8. $y - 2 = -2(x - 9)$

a. $y = -2x + 20$

b. $2x + y = 20$

c. $2x - y = 20$

d. $2x + y = 16$

Write the equation in slope-intercept form.

9. $y + 3 = 2(x - 1)$

a. $y = 2x - 5$

b. $y = 2x + 5$

c. $y = 2x + 5$

d. $y = -2x - 5$

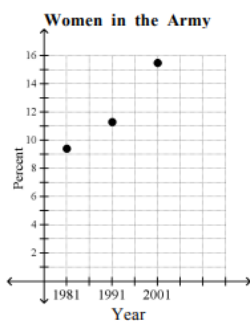
<https://www.multiplication.com/games/play/quick-flash-ii>

Pick starting level 1-9, you have a 'green' dot in the bottom left of each card. Practice all levels!

May 8, 2019, Wednesday

Determine whether the graph shows a positive correlation, a negative correlation, or no correlation. If there is a positive or negative correlation, describe its meaning in the situation.

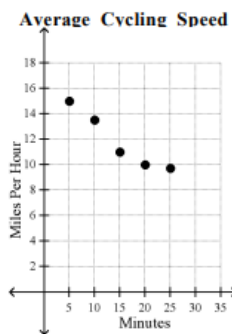
12.



Source: Time Magazine, March 24, 2003

- a. positive; as time goes on, more women are in the army.
- b. no correlation
- c. negative; as time goes on, fewer women are in the army.
- d. negative; as time goes on, more women are in the army.

13.



- a. no correlation
- b. negative; as time passes, speed decreases
- c. positive; as time passes, speed increases
- d. positive; as time passes, speed decreases


<https://www.multiplication.com/quiz/multiplication-self-correcting-quizzes>

take the pre-test, complete 0-9, take the post-test

→ ↻ 🏠 🔒 IXL Learning, Inc [US] | <https://www.multiplication.com/quiz/multiplication-self-correcting-quizzes>
















Apps Weebly Website Bui... 📅 Calendar - lcole@p... 📍 Paulding County Lo... 🏠 Home 📧 Remind 🟡 Holt McDou...

- Picture hint option
- Large equation input box
- Automatically scored and timed
- Enter answer with keyboard or touch pad



[Click here for "Pin" Style Navigation](#)

MULTIPLICATION Equation Family Quizzes
(All equation for the fact group)

Pre-Test 	Zeros 	Ones 	Twos 	Threes 	Fours 
Fives 	Sixes 	Sevens 	Eights 	Nines 	Post-Test 
Tens 	Elevens 	Twelves 			

May 9, 2019, Thursday

18. $2h + 6 > -8$
 a. $h > -10$
 b. $h > -7$

$$\begin{array}{r} 2h + 6 > -8 \\ \underline{-6 \quad -6} \\ 2h > -14 \\ \underline{\div 2} \\ h > -7 \end{array}$$

- ~~c. $h < -7$~~
 d. $h > -14$

19. $4a + 3 - 7a > 15$
 a. $a > -4$
 b. $a > 3$

$$\begin{array}{r} 4a + 3 - 7a > 15 \\ \underline{-3a - 3} \\ -3a > 12 \\ \underline{\div -3} \\ a < -4 \end{array}$$

- c. $a < -6$
 d. $a < -4$


18 b

19 d



<https://www.timestables.com/>

complete 1 times tables through 10 times tables & 11 and 12, if you want



Learn your multiplication tables

At Timestables.com you can easily practice all of your tables. The arithmetic problems are clear and simple so you can immediately get started on practicing your tables. Select one of the multiplication table you wish to practice from the list below and show what you can do on the speed test or printout great worksheets.

Which multiplication table do you want to learn?


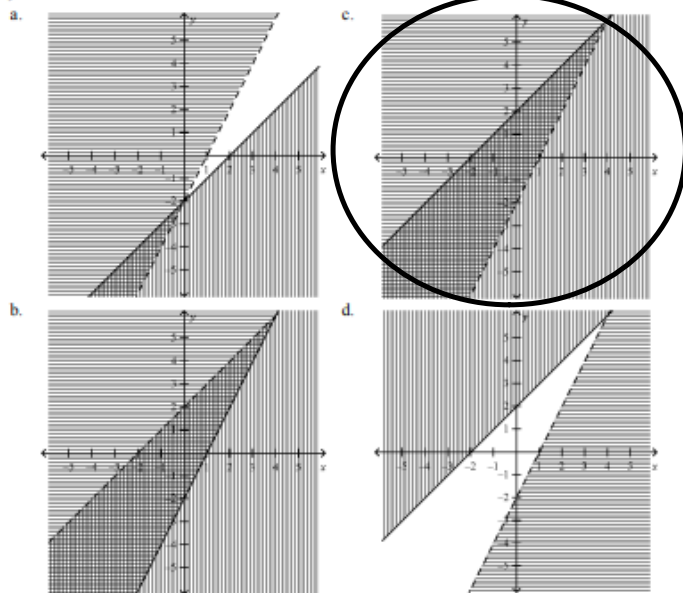
1 times table	2 times table	3 times table	4 times table
5 times table	6 times table	7 times table	8 times table
9 times table	10 times table	11 times table	12 times table

May 10, 2019, Friday 10 more days!!

Solve the system of inequalities by graphing.

26. $y \leq x + 2$

$y > 2x - 2$



<https://www.mathsisfun.com/numbers/math-trainer-multiply.html>

workout time 5 minutes, cutoff 8 sec, try 1x1to5x5, 6x6to9x9, 2x6to5x9, and one other of your choosing

Assessment

<https://www.coolmath4kids.com/quizzes/multiplication>

pick 0-10, 20 questions, 30 seconds

