

February 25, 2019, Monday

This is the EOC formula sheet for Algebra 1...  
 write down three eqns you have used before....  
 Define at least 5 of the variables in the eqns you have used...

Feb 15-10:49 AM

### Transformations of EXPONENTIAL FUNCTIONS

inverts the exponential (reflects) Horizontal Shift

$$f(x) = -a(b)^{x \pm h} \pm k$$

adjusts the steepness of the exponential Vertical Shift

Examples:  $f(x) = 2(\frac{1}{2})^{x+2} + 3$   
 $f(x) = -(2)^x - 4$   
 $f(x) = 2^x$

Non-examples:  $y = 2x + 3$   
 $f(x) = x + 1$

Feb 15-10:50 AM

### Characteristics

SAME FOR EVERY EXPONENTIAL GRAPH:

Zero x-intercepts (#, 0)  
 Y-intercept (0, #)  
 Domain  $(-\infty, +\infty)$

Average Rate of Change: From point A(x<sub>1</sub>, y<sub>1</sub>) to point B(x<sub>2</sub>, y<sub>2</sub>) is  $\frac{y_2 - y_1}{x_2 - x_1} = \frac{2^2 - 2^1}{2 - 1} = 2$  Asymptote:  $y = k$

For an EXPONENTIAL that goes UP TO THE RIGHT:  
 Range:  $(k, \text{Asymptote})$ ,  $(-\infty, +\infty)$   
 Interval of Increase:  $(-\infty, +\infty)$   
 Interval of Decrease: NONE  
 End Behavior:  
 As  $x \rightarrow -\infty$ ,  $f(x) \rightarrow k$  (Asymptote)  
 As  $x \rightarrow +\infty$ ,  $f(x) \rightarrow \infty$

For an EXPONENTIAL that goes DOWN TO THE RIGHT:  
 Range:  $(-\infty, k, \text{Asymptote})$   
 Interval of Increase: NONE  
 Interval of Decrease:  $(-\infty, +\infty)$   
 End Behavior:  
 As  $x \rightarrow -\infty$ ,  $f(x) \rightarrow k$  (Asymptote)  
 As  $x \rightarrow +\infty$ ,  $f(x) \rightarrow -\infty$

For an EXPONENTIAL that goes UP TO THE LEFT:  
 Range:  $(k, \text{Asymptote})$ ,  $(-\infty, +\infty)$   
 Interval of Increase: NONE  
 Interval of Decrease:  $(-\infty, +\infty)$   
 End Behavior:  
 As  $x \rightarrow -\infty$ ,  $f(x) \rightarrow \infty$   
 As  $x \rightarrow +\infty$ ,  $f(x) \rightarrow k$  (Asymptote)

For an EXPONENTIAL that goes DOWN TO THE LEFT:  
 Range:  $(-\infty, k, \text{Asymptote})$   
 Interval of Increase: NONE  
 Interval of Decrease:  $(-\infty, +\infty)$   
 End Behavior:  
 As  $x \rightarrow -\infty$ ,  $f(x) \rightarrow \infty$   
 As  $x \rightarrow +\infty$ ,  $f(x) \rightarrow k$  (Asymptote)

Feb 15-10:51 AM

Algebra 1 - Day 1, 2/26/2018 Graphing Exponential Functions NOTES  
 Today's Question: How do I solve an exponential equation algebraically? MCC9-12.A.CED.1

### Graphing Exponential Functions

$y = a(b)^x$

1.  $y = 2^x$

x	y
-2	.25
-1	.5
0	1
1	2
2	4

2.  $y = 3^x$

x	y
-2	1/9
-1	1/3
0	1
1	3
2	9

3.  $y = (\frac{1}{2})^x$

x	y
-2	4
-1	2
0	1
1	1/2
2	1/4

Feb 15-10:51 AM

### Writing Exponential Equations Notes

$y = a(b)^x$      $a = 2$   
 $y = 2(3)^x$      $b = 3$

1. Bacteria can multiply at an alarming rate when each bacterium splits into two new cells, than another.  
 When  $x = 0$  this is 5 the y value.

Hour	0	1	2	3	4	5	6	7	8
Bacteria	5	10	20	40	80	160	320	640	1280

a. Write an equation that represents this situation.  
 $f(x) = 2(2)^x$

b. After how many hours will there be over 1 million bacteria?  
 $1,000,000 = 2(2)^x$      $500,000 = 2^x$      $2^x = 500,000$      $x = 30$

2. Given the following table, write the equation that represents the information.

x	f(x)
-2	229
-1	73
0	23
1	7
2	2.3
3	0.73

$f(x) = 81(1/3)^x$      $b = 1/3$

3. Each year the local country club sponsors a tennis tournament. It starts with 128 players and each year half of the players are eliminated.

Rounds	0	1	2	3	4	5	6	7
Number of Players left	128	64	32	16	8	4	2	1

a. Write an equation for this scenario.  
 $f(x) = 128(.5)^x$      $b = 1/2$

b. How many players are left after 6 rounds?  
 $f(x) = 128(.5)^6 = 2$

4. A colony of insects doubles every day. If the colony has 80 insects today, how many will be present in 10 days?  
 $f(x) = a(b)^x$   
 $f(x) = 80(2)^x$   
 $f(x) = 80(2)^{10}$   
 $f(x) = 4,723,920$

Feb 15-10:52 AM

Algebra 1 - Day 1, 2/26/2018 Graphing & Working with Exponentials HW Name: \_\_\_\_\_

Fill in the table for each exponential function and then graph the function.

1.  $y = 2^x$

x	y
-3	1/8
-2	1/4
-1	1/2
0	1
1	2
2	4
3	8

2.  $y = 5^x$

x	y
-3	1/125
-2	1/25
-1	1/5
0	1
1	5
2	25
3	125

3.  $y = (\frac{1}{3})^x$

x	y
-3	27
-2	9
-1	3
0	1
1	1/3
2	1/9
3	1/27

Feb 15-10:52 AM

Writing Exponential Models HW

Exponential Model:  $y = a(b)^x$        $a = \text{start value}$   
 $b = \text{what you multiply or divide by (rate of change)}$

1. Your brother tells you a secret. You see no harm in telling two friends. After this second "passing" of the secret, 4 people now know the secret (you, your brother, you and two friends). If each of these friends now tells two more people, after the third "passing" of the secret, eight people will know. Write an equation to represent the "passing" of the secret. If this pattern of spreading the secret continues, how many people will know the secret after 10 such "passings"?

$y = 1(2)^x$        $\sum y = 1(2)^{10}$   
 $y = 1024$

2. Alice was sitting in the bleachers on her project. She noticed that every time she looked at her phone, the battery level was dropping. Every day she uses her phone for a while. Write an equation to represent how many minutes she could be on her phone each day. How many days will she have to use her phone less than her current use?

**Face:**  $y = 1(2.6)^x$        $\sum y = 1(2.6)^{10}$   
 $y = 14116.7095700000$

3. The following table represents how the amount of caffeine in your system each hour after drinking a cup of coffee.

x	C(t)
0	330
1	165
2	82.5
3	41.25
4	20.625

a. Write an equation based on the information:  
 $y = 330(\frac{1}{2})^x$

b. How many hours would it take to have less than 1mg of caffeine left in your system?  
 $y = 330(\frac{1}{2})^x = .64$

4. Only has a leaking faucet in her bathroom. When she noticed the leak, there was a puddle that was 2 inches in diameter. Each hour, the diameter will double in size. If she doesn't do anything to stop the leak, how large will the puddle be after 10 hours?

$f(x) = 2(3)^x$        $\sum f(x) = 2(3)^{10}$   
 $f(x) = 118098.8$

Feb 15-10:52 AM

Graphing/Writing Exponential Equations TOTD (2/26)      Name \_\_\_\_\_

Graph the given exponential functions.

$y = 4^x$

x	f(x)
-3	
-2	
-1	
0	
1	
2	
3	

$y = (\frac{1}{2})^x$

x	f(x)
-3	
-2	
-1	
0	
1	
2	
3	

Given the table below, write the equation that represents the information:

x	-2	-1	0	1	2
f(x)	1296	216	36	6	1

A field of flowers is beginning to grow near your house. At first, there were 12 flowers but you notice that the flowers are doubling every day.

a. Write an equation to represent this situation.

b. How many flowers will there be after 15 days?

Feb 15-10:53 AM

Graphing/Writing Exponential Equations TOTD (2/26)      Name \_\_\_\_\_

Graph the given exponential functions.

$y = (\frac{1}{2})^x$

x	f(x)
-3	
-2	
-1	
0	
1	
2	
3	

$y = 6^x$

x	f(x)
-3	
-2	
-1	
0	
1	
2	
3	

Given the table below, write the equation that represents the information:

x	-2	-1	0	1	2
f(x)	1	6	36	216	1296

A field of flowers is beginning to grow near your house. At first, there were 5 flowers but you notice that the flowers are doubling every day.

a. Write an equation to represent this situation.

b. How many flowers will there be after 15 days?

Feb 15-10:53 AM

February 26, 2019, Tuesday

State 2 characteristics of each exponential graph.

1)  $f(x) = 3(\frac{1}{2})^x$

2)  $f(x) = 3 \cdot 2^x$

Feb 15-10:53 AM

Algebra 1 - Day 2, 2/27/2018      Characteristics Notes EXAMPLES

Give the transformations that have taken place from the parent function of  $f(x) = 3^x$ .

a)  $f(x) = 3(2)^{x+4}$       b)  $f(x) = -\frac{1}{2}(2)^{x-3}$

c)  $f(x) = \frac{1}{2}(2)^{x+1}$       d)  $f(x) = 3+2^x$

$y = -5^x$

Transformations: \_\_\_\_\_  
 Domain: \_\_\_\_\_ Range: \_\_\_\_\_ Asymptote: \_\_\_\_\_  
 Interval: \_\_\_\_\_ X-intercept: \_\_\_\_\_ Y-intercept: \_\_\_\_\_  
 End Behavior: \_\_\_\_\_  
 $x \rightarrow -\infty, f(x) \rightarrow$  \_\_\_\_\_  
 $x \rightarrow \infty, f(x) \rightarrow$  \_\_\_\_\_  
 Average Rate of change [0, 1]: \_\_\_\_\_

$y = (\frac{1}{2})^x + 3$

Transformations: \_\_\_\_\_  
 Domain: \_\_\_\_\_ Range: \_\_\_\_\_ Asymptote: \_\_\_\_\_  
 Interval: \_\_\_\_\_ X-intercept: \_\_\_\_\_ Y-intercept: \_\_\_\_\_  
 End Behavior: \_\_\_\_\_  
 $x \rightarrow -\infty, f(x) \rightarrow$  \_\_\_\_\_  
 $x \rightarrow \infty, f(x) \rightarrow$  \_\_\_\_\_  
 Average Rate of change [1, 2]: \_\_\_\_\_

$y = 2^{x+1}$

Transformations: \_\_\_\_\_  
 Domain: \_\_\_\_\_ Range: \_\_\_\_\_ Asymptote: \_\_\_\_\_  
 Interval: \_\_\_\_\_ X-intercept: \_\_\_\_\_ Y-intercept: \_\_\_\_\_  
 End Behavior: \_\_\_\_\_  
 $x \rightarrow -\infty, f(x) \rightarrow$  \_\_\_\_\_  
 $x \rightarrow \infty, f(x) \rightarrow$  \_\_\_\_\_  
 Average Rate of change [0, 2]: \_\_\_\_\_

Feb 15-10:54 AM

Algebra 1 - Day 2, 2/27/2018      Transformations & Graphing Exponentials HW      Name \_\_\_\_\_

Give the transformations that have taken place from the parent function of  $f(x) = 2^x$ .

1.  $f(x) = 2^{x+4} - 5$       2.  $f(x) = 2^{x-4}$       3.  $f(x) = -2^x - 1$

$y = 2^{x+1}$

Transformations: \_\_\_\_\_  
 State 3 points on Graph: \_\_\_\_\_  
 Domain: \_\_\_\_\_ Range: \_\_\_\_\_  
 Asymptote: \_\_\_\_\_ Interval: \_\_\_\_\_  
 X-intercept: \_\_\_\_\_ Y-intercept: \_\_\_\_\_  
 End Behavior: \_\_\_\_\_  
 $x \rightarrow -\infty, f(x) \rightarrow$  \_\_\_\_\_  
 $x \rightarrow \infty, f(x) \rightarrow$  \_\_\_\_\_  
 Average Rate of change [-2, 0]: \_\_\_\_\_

$y = -3^{x-2}$

Transformations: \_\_\_\_\_  
 State 3 points on Graph: \_\_\_\_\_  
 Domain: \_\_\_\_\_ Range: \_\_\_\_\_  
 Asymptote: \_\_\_\_\_ Interval: \_\_\_\_\_  
 X-intercept: \_\_\_\_\_ Y-intercept: \_\_\_\_\_  
 End Behavior: \_\_\_\_\_  
 $x \rightarrow -\infty, f(x) \rightarrow$  \_\_\_\_\_  
 $x \rightarrow \infty, f(x) \rightarrow$  \_\_\_\_\_  
 Average Rate of change [-2, 0]: \_\_\_\_\_

Feb 15-10:56 AM

TOTD - Transformations/Characteristics  
Graph & identify all characteristics.  
 $y = \left(\frac{1}{2}\right)^x + 1$

x	y
-2	
-1	
0	
1	
2	

Transformations: \_\_\_\_\_  
 Domain \_\_\_\_\_ Range \_\_\_\_\_  
 Asymptote \_\_\_\_\_  
 Interval (increasing) INCREASE DECREASE  
 X-intercept \_\_\_\_\_ Y-intercept \_\_\_\_\_  
 End Behavior  
 $x \rightarrow -\infty, f(x) \rightarrow$  \_\_\_\_\_  
 $x \rightarrow \infty, f(x) \rightarrow$  \_\_\_\_\_

Average Rate of change [-2, 0]: \_\_\_\_\_

---

TOTD - Transformations/Characteristics  
Graph & identify all characteristics.  
 $y = 2\left(\frac{1}{3}\right)^x$

x	y
-1	
0	
1	
2	
3	

Transformations: \_\_\_\_\_  
 Domain \_\_\_\_\_ Range \_\_\_\_\_  
 Asymptote \_\_\_\_\_  
 Interval (increasing) INCREASE DECREASE  
 X-intercept \_\_\_\_\_ Y-intercept \_\_\_\_\_  
 End Behavior  
 $x \rightarrow -\infty, f(x) \rightarrow$  \_\_\_\_\_  
 $x \rightarrow \infty, f(x) \rightarrow$  \_\_\_\_\_

Average Rate of change [-1, 0]: \_\_\_\_\_

Feb 15-10:56 AM

Algebra 1 - Day 2, 10/3/2017 Unit 4 Practice Quiz Name \_\_\_\_\_

1) Use the given graph to identify the characteristics. Fill in the table for each exponential function and then graph the function.  
 5)  $f(x) = 3(2)^x$

x	y
-3	
-2	
-1	
0	
1	
2	
3	

Domain \_\_\_\_\_  
 Range \_\_\_\_\_  
 Asymptote \_\_\_\_\_  
 X-intercept \_\_\_\_\_  
 Y-intercept \_\_\_\_\_  
 End Behavior:  
 As  $x \rightarrow -\infty, y \rightarrow$  \_\_\_\_\_  
 As  $x \rightarrow \infty, y \rightarrow$  \_\_\_\_\_  
 Circle one:  
 Increasing-Decreasing  
 ABCD [0, 1]: \_\_\_\_\_

2) Use the given graph to identify the characteristics.

x	y
-3	
-2	
-1	
0	
1	
2	
3	

Domain \_\_\_\_\_  
 Range \_\_\_\_\_  
 Asymptote \_\_\_\_\_  
 X-intercept \_\_\_\_\_  
 Y-intercept \_\_\_\_\_  
 End Behavior:  
 As  $x \rightarrow -\infty, y \rightarrow$  \_\_\_\_\_  
 As  $x \rightarrow \infty, y \rightarrow$  \_\_\_\_\_  
 Circle one:  
 Increasing-Decreasing  
 ABCD [1, 0]: \_\_\_\_\_

4)  $f(x) = 5^x$

x	y
-3	
-2	
-1	
0	
1	
2	
3	

5)  $f(x) = \left(\frac{1}{2}\right)^x$

x	y
-3	
-2	
-1	
0	
1	
2	
3	

Feb 15-10:56 AM

Consider the parent function  $f(x) = \left(\frac{1}{2}\right)^x$ . How would the original graph be transformed if:

a)  $f(x) = 2\left(\frac{1}{2}\right)^x$

b)  $f(x) = \left(\frac{1}{2}\right)^x - 5$

c)  $f(x) = \left(\frac{1}{2}\right)^{x+4}$

d)  $f(x) = -\left(\frac{1}{2}\right)^x$

e)  $f(x) = -\frac{1}{4}\left(\frac{1}{2}\right)^{x-1} + 5$

Write an equation for the given graphs:

a)

b)

Feb 15-10:57 AM

Feb. 27, 2019, Wednesday

Copy the exponential graph, state the domain, range, asymptote, interval of increase or interval of decrease, x-intercept, y-intercept, and end behavior

1)

$f(x) = 3 \cdot 2^{x-2} - 1$

Feb 15-10:57 AM

Day 3 - 2/27/2018 Exponential Growth & Decay Notes

$f(x) = a(b)^x$   
 $a =$  \_\_\_\_\_  $b =$  \_\_\_\_\_  $x =$  \_\_\_\_\_  
 $f(x) = 2(1.5)^x$   $f(x) = 2(0.5)^x$

Growth: \_\_\_\_\_ Decay: \_\_\_\_\_

Another formula:  $f(x) = a(1 + r)^x$   
 $a =$  \_\_\_\_\_  $r =$  \_\_\_\_\_  $t =$  \_\_\_\_\_  
 $f(x) = 2(1 + 0.5)^x$   $f(x) = 2(1 - 0.5)^x$

1) The number of fish in a pond is increasing at a rate of 12% per month. At the beginning of the year, there were 130 fish in the pond. Write a function modeling the number of fish in the pond. Use the function to find the number of fish in the pond after 8 months.

Starting amount:	Growth Factor:	Function:	Number of fish after 8 months:
a = _____	b = 1 + _____	f(x) = _____	f(8) = _____

2) Tom bought a used car for \$7,000.00. The value of his car depreciating by 18% per year. Write a function modeling the value of Tom's car after x years. How much will his car be worth in 10 years?

3) An illness is spreading throughout the community. Currently 6 people are infected. The number of people who have been infected is doubling every day. Write a function modeling the number of people infected after x days. Approximately, how long will it take for 190 people to become infected?

Feb 15-10:58 AM

Day 3 - 2/28/2018 Growth/Decay HW Name \_\_\_\_\_

Growth:  $y = P(1+r)^t$  Decay:  $y = P(1-r)^t$

1) The motor population is 25,000 and is decreasing by 20% each year. Write a model for this situation. What will be the motor population after 3 years?

2) The number of mosquitoes at the beach has tripled every year since 1999. In 1999, there were 2,500 mosquitoes. Write a model for this situation. How many mosquitoes would you predict were at the beach in 2005?

3) I bought a car for \$25,000, but its value is depreciating at a rate of 10% per year. How much will my car be worth after 8 years?

4) Your starting salary at a new company is \$34,000 and it increases by 2.5% each year. What will your salary be in 5 years?

5) In 2010 an item cost \$9.00. The price increased by 1.5% each year. How much will it cost in 20 years?

6) The yearly profits of a company are \$25,000. The profits have been decreasing by 6% per year. What will be the profits in 8 years?

7) You bought \$200 worth of stocks in 2012. The value of the stocks has been decreasing by 10% each year. What will your stock be worth in 5 years?

8) Your car cost \$42,500 when you purchased it in 2015. The value of the car decreases by 15% annually. How much will your car be worth in 7 years?

Feb 15-10:59 AM

Feb. 28, 2019, Thursday

Identify as growth or decay  
2 graphs & 2 equations

**The exponential growth of decay?**

1)

3)  $y = 4 \cdot 2^x$

2)

4)  $y = 4 \cdot \left(\frac{1}{2}\right)^x$

Feb 15-10:59 AM

Algebra 1 - Day 3, 10/4/2017

Unit 4 Quiz 1A Name \_\_\_\_\_

1. Consider the parent function  $f(x) = 4^x$ . How would the original graph be transformed if it were to be changed to  $f(x) = 4^{x+1} - 2$ ?

- right 1 and down 2
- left 1 and down 2
- right 2 and down 1
- left 2 and down 1

2. Identify the characteristics of the function below:

Domain: \_\_\_\_\_

Range: \_\_\_\_\_

Asymptote: \_\_\_\_\_

X-intercept: \_\_\_\_\_

Y-intercept: \_\_\_\_\_

Circle one:  
Increasing - Decreasing

End Behavior:  
As  $x \rightarrow -\infty, y \rightarrow$  \_\_\_\_\_  
As  $x \rightarrow \infty, y \rightarrow$  \_\_\_\_\_

3. Ms. Graham has 3 tulips in her garden. The number of tulips in her garden doubles every month. Write an equation to represent how many tulips are in her garden.

- $y = 3(2)^x$
- $y = 2(3)^x$
- $y = 3(2)^x$
- $y = (2)^x$

4. Calculate the average rate of change of the graph over the interval  $[0, 2]$ .

x	h(x)
-3	-2
-2	-1
-1	0
0	1
1	2
2	3

5. Write an exponential equation given the table:

x	h(x)
-3	-2
-2	-1
-1	0
0	1
1	2
2	3

- $y = 2(2)^x$
- $y = 3(4)^x$
- $y = 4(8)^x$
- $y = 4(2)^x$

6. Write an equation for the given graph.

- $f(x) = 2 \cdot 3^x$
- $f(x) = 3 \cdot 2^x$
- $f(x) = 5 \cdot 2^x$
- $f(x) = 2 \cdot 2^x$

Feb 15-11:00 AM

Algebra 1 - Day 5, 10/4/2017

Unit 4 Quiz 1B Name \_\_\_\_\_

1. Consider the parent function  $f(x) = 4^x$ . How would the original graph be transformed if it were to be changed to  $f(x) = 4^{x+1} - 2$ ?

- right 1 and down 2
- left 1 and down 2
- right 2 and down 1
- left 2 and down 1

2. Identify the characteristics of the function below:

Domain: \_\_\_\_\_

Range: \_\_\_\_\_

Asymptote: \_\_\_\_\_

X-intercept: \_\_\_\_\_

Y-intercept: \_\_\_\_\_

Circle one:  
Increasing - Decreasing

End Behavior:  
As  $x \rightarrow -\infty, y \rightarrow$  \_\_\_\_\_  
As  $x \rightarrow \infty, y \rightarrow$  \_\_\_\_\_

3. Ms. Graham has 3 tulips in her garden. The number of tulips in her garden doubles every month. Write an equation to represent how many tulips are in her garden.

- $y = (2)^x$
- $y = 3(2)^x$
- $y = 2(3)^x$
- $y = 3(2)^x$

4. Calculate the average rate of change of the graph over the interval  $[-1, 0]$ .

x	h(x)
-3	-2
-2	-1
-1	0
0	1
1	2
2	3
3	4

Feb 15-11:01 AM

Day 4 - Geometric Sequences Notes

Geometric Recursive Formula: \_\_\_\_\_ Geometric Explicit Formula: \_\_\_\_\_

	Common ratio	Recursive Formula	Explicit Formula
1, 2, 4, 8, 16, ...			
10, -2, $\frac{2}{5}, -\frac{2}{25}, \dots$			
5, 15, 45, 135, ...			
320, 80, 20, 5, ...			

- Find the first five terms of the geometric sequence defined as follows:  
 $a_n = -4(3)^{n-1}$
- Find the first five terms of the geometric sequence defined as follows:  
 $a_n = 2n - \frac{1}{4}n^2 - 216$
- A colony of ants starts with 5 members. The colony triples every year.
  - Write an explicit function to represent the sequence.
  - How many members will the colony have after 3 years?
  - How many years will it take for the colony to reach greater than 1,000 ants?
- Find the common ratio and the missing term in the sequence  
7, 21, 63, \_\_\_\_\_, 567, ...

Feb 15-11:02 AM

Geometric Sequences HW Name \_\_\_\_\_

Find the next three terms in each geometric sequence.

- 2, 4, 8, 16, ...
- 400, 200, 100, 50, ...
- 4, -12, 36, -108, ...

Find the missing term(s) in each geometric sequence.

- \_\_\_\_\_, 1, -3, 9, ...
- \_\_\_\_\_, 6, 18, \_\_\_\_\_, ...

Write the recursive rule and explicit rule for each geometric sequence.

- 9, 27, 81, 243, ... Explicit: \_\_\_\_\_ Recursive: \_\_\_\_\_
- 7, 5, 5, -5, ... Explicit: \_\_\_\_\_ Recursive: \_\_\_\_\_
- 12, 3,  $\frac{3}{4}$ ,  $\frac{3}{16}$ , ... Explicit: \_\_\_\_\_ Recursive: \_\_\_\_\_

9. The first term of a geometric sequence is 1, and the common ratio is 10. What is the 10<sup>th</sup> term of the sequence?

10. What is the 11<sup>th</sup> term of the geometric sequence 3, 6, 12, 24, ...?

11. A construction company is building homes in a neighborhood. During the 1st month they built 3 homes, during the 2nd month they built 6 homes, and during the 3rd month they built 12 homes.

- Write the recursive rule for the sequence.
- Write the explicit rule for the sequence.
- When will the construction company build 48 homes?

Feb 15-11:04 AM

Algebra 1 Geometric Sequence Practice Name \_\_\_\_\_ ID: 1

Date \_\_\_\_\_ Period \_\_\_\_\_

State if each sequence is geometric.

- 1) -4, -8, -16, 32, ...
- 2) 2, -12, -26, -40, ...
- 3) 11, 17, 23, 29, ...
- 4) 4, 12, 36, 108, ...
- 5) -10, -5, 0, 5, ...
- 6) -2, -12, -72, -432, ...
- 7) 1, 6, 36, 216, ...
- 8) 9, 99, 999, 9999, ...

Find the common ratio.

- 9) -4, 8, -16, 32, ...
- 10) -3, 9, -27, 81, ...
- 11) 2, 8, 32, 128, ...
- 12) 4, 12, 36, 108, ...

Feb 15-11:04 AM

13) 3, -9, 27, -81, ...      14) -1, -4, -16, -64, ...

15) 3, 6, 12, 24, ...      16) -4, 20, -100, 500, ...

Given the recursive formula for a geometric sequence find the first five terms.

17)  $a_n = a_{n-1} \cdot 3$   
 $a_1 = 1$

18)  $a_n = a_{n-1} \cdot 5$   
 $a_1 = 2$

19)  $a_n = a_{n-1} \cdot 5$   
 $a_1 = 1$

20)  $a_n = a_{n-1} \cdot 4$   
 $a_1 = 2$

21)  $a_n = a_{n-1} \cdot 4$   
 $a_1 = 0.5$

22)  $a_n = a_{n-1} \cdot 2$   
 $a_1 = 1$

23)  $a_n = a_{n-1} \cdot \frac{1}{2}$   
 $a_1 = 4$

24)  $a_n = a_{n-1} \cdot 2$   
 $a_1 = 3$

Feb 15-11:04 AM

Given the explicit formula for a geometric sequence find the 8th term.

25)  $a_n = \frac{1}{2} \left(\frac{1}{2}\right)^{n-1}$

26)  $a_n = 4 \cdot (-2)^{n-1}$

27)  $a_n = 3 \cdot (-2)^{n-1}$

28)  $a_n = 3 \cdot \left(\frac{1}{3}\right)^{n-1}$

29)  $a_n = 32 \cdot \left(\frac{1}{2}\right)^{n-1}$

30)  $a_n = 2^{n-1}$

31)  $a_n = 2 \cdot 4^{n-1}$

32)  $a_n = \frac{2}{3} \cdot \left(\frac{1}{3}\right)^{n-1}$

Find the recursive formula.

33) -0.5, 1, -2, 4, ...

34)  $3, \frac{3}{2}, \frac{3}{4}, \frac{3}{8}, \dots$

35) 972, 324, 108, 36, ...

36) 1, 5, 25, 125, ...

Feb 15-11:04 AM

37) 375, 75, 15, 3, ...      38) 4, 20, 100, 500, ...

39) -1, 6, -36, 216, ...      40)  $1, -\frac{1}{2}, \frac{1}{4}, -\frac{1}{8}, \dots$

Find the explicit formula.

41) -3, 6, -12, 24, ...      42) 125, -25, 5, -1, ...

43)  $2, \frac{1}{2}, \frac{1}{4}, \dots$       44) -2, 10, -50, 250, ...

45) -0.2, -1, -5, -25, ...      46) 1875, 375, 75, 15, ...

47) 32, 16, 8, 4, ...      48) -3, -9, -27, -81, ...

Feb 15-11:05 AM

March 1, 2019, Friday

2 highly missed from quiz

2. Identify the characteristics of the function below.

Domain: \_\_\_\_\_

Range: \_\_\_\_\_


Asymptote: \_\_\_\_\_

X-intercept: \_\_\_\_\_

Y-intercept: \_\_\_\_\_

Circle one:  
Increasing or Decreasing

End Behavior:  
As  $x \rightarrow -\infty, y \rightarrow$  \_\_\_\_\_  
As  $x \rightarrow \infty, y \rightarrow$  \_\_\_\_\_



10. Consider the first six terms of this sequence: 6, 12, 24, 48, 96, ...  
Which equation defines the sequence?

a)  $a_n = 6n$   
b)  $a_n = 6^n$   
c)  $a_n = 5 \cdot (2)^n$   
d)  $a_n = 6 \cdot (2)^{n-1}$

6. Write an exponential equation given the table.

x	-3	-2	-1	0	1	2	3
y	1/8	1/4	1/2	1	2	4	8

A.  $y = 2(2)^x$   
B.  $y = 1(4)^x$   
C.  $y = 4(8)^x$   
D.  $y = 4(2)^x$

Feb 15-11:05 AM

TOTD - Geometric Sequences      Name \_\_\_\_\_

Create your own geometric sequence. The first term in your sequence is **12620** and your sequence is **decreasing**.

12620, \_\_\_\_\_, \_\_\_\_\_, \_\_\_\_\_, ...

$a_1 =$  \_\_\_\_\_  $r =$  \_\_\_\_\_

Write the recursive formula for YOUR sequence.      Write the explicit formula for YOUR sequence.

Find the 8<sup>th</sup> term in your sequence using the explicit formula.

TOTD - Geometric Sequences      Name \_\_\_\_\_

Create your own geometric sequence. The first term in your sequence is **8** and your sequence is **growing**.

8, \_\_\_\_\_, \_\_\_\_\_, \_\_\_\_\_, ...

$a_1 =$  \_\_\_\_\_  $r =$  \_\_\_\_\_

Write the recursive formula for YOUR sequence.      Write the explicit formula for YOUR sequence.

Find the 8<sup>th</sup> term in your sequence using the explicit formula.

Feb 15-11:09 AM

TOTD - Geometric Sequences      Name \_\_\_\_\_

Create your own geometric sequence. The first term in your sequence is **24330** and your sequence is **decreasing**.

24330, \_\_\_\_\_, \_\_\_\_\_, \_\_\_\_\_, ...

$a_1 =$  \_\_\_\_\_  $r =$  \_\_\_\_\_

Write the recursive formula for YOUR sequence.      Write the explicit formula for YOUR sequence.

Find the 8<sup>th</sup> term in your sequence using the explicit formula.

TOTD - Geometric Sequences      Name \_\_\_\_\_

Create your own geometric sequence. The first term in your sequence is **3** and your sequence is **growing**.

3, \_\_\_\_\_, \_\_\_\_\_, \_\_\_\_\_, ...

$a_1 =$  \_\_\_\_\_  $r =$  \_\_\_\_\_

Write the recursive formula for YOUR sequence.      Write the explicit formula for YOUR sequence.

Find the 8<sup>th</sup> term in your sequence using the explicit formula.

Feb 15-11:10 AM

Algebra 1 ~ Day 4, 3/1/2018 Unit 4 Test Review Name \_\_\_\_\_


1) Write an explicit rule and find the 6<sup>th</sup> term: 256, 64, 16, 4, ...


2) Consider the sequence 2, 6, 18, 54, ...  
 a) Find the next 3 terms      b) Determine the recursive formula      c) Determine the explicit formula

3) Given that a sequence is geometric,  $a_{10} = 98415$ , and the common ratio is 3, find  $a_1$ .

For each of the functions, identify the characteristics.

4) Graph the function  $f(x) = |2x^2 - 3|$



5) 

Domain: \_\_\_\_\_ Range: \_\_\_\_\_  
 x-intercept: \_\_\_\_\_ y-intercept: \_\_\_\_\_  
 Growth or Decay \_\_\_\_\_  
 End Behavior: \_\_\_\_\_

6) Describe the transformations made to  $f(x) = 3^x$  to draw the following functions.  
 a)  $g(x) = \frac{1}{2}3^{x+5}$       b)  $h(x) = -2(3)^{x-1}$

Feb 15-11:10 AM

7) Write an equation for the given description:  
 Exponential that has a base of 4, stretched by 3, moved right 7, and up by 1.

8) Given the equation  $y = 650(1.075)^x$   
 a. Does the equation represent growth or decay?  
 b. What is the growth factor?  
 c. What is the rate of growth?  
 d. What is the initial value?  
 e. Evaluate for  $x=9$

9) Write an explicit formula and recursive formula to model the number of dots per day.

	○ ○	○ ○ ○ ○ ○ ○
Day 1	Day 2	Day 3

How many dots will there be on day 7?

10) Taylor is training for a marathon. He decides to begin by running 3 miles and increase by 1.5 miles each day. Write an equation to represent the scenario. How long will it take him to run 26.2 miles?

Feb 15-11:10 AM

bought a Boston Whaler in 2004 for \$12,500. The boat's value depreciates by 7% a year. How is the boat worth now? How much is it worth in 2020?

population of a large city increases by a rate of 3% a year. When the 2000 census was taken, the population was 1.2 million.  
 Write a model for this population growth.

What should the population be now? What is the projected population for 2020?

Which function represents the sequence?

$n$	1	2	3	4	5	...
$a_n$	6	18	54	162	486	...

A.  $f(x) = 3^x - 5$     B.  $f(x) = 3^{x+5}$     C.  $f(x) = 3^{x-5}$     D.  $f(x) = 3^x + 5$

Which table represents an exponential function. Write the equation that represents the function.

$x$	0	1	2	3	4
$y$	3	12	48	192	768

True/False: An exponential function will always have an x-intercept.  
 True/False: An exponential function will always have a y-intercept.  
 Is the graph of the following function increasing or decreasing?  $f(x) = 5^x$

Feb 15-11:10 AM

19) The table below describes an exponential function.

$x$	0	1	2	3
$f(x)$	64	32	16	8

a) Is the function exponential growth or exponential decay?  
 b) Write the equation of the function.

20) An item is purchased for \$4000 and it depreciated in value 10% per year. Write an equation to describe the value of the item in  $t$  years.

21) Given the function  $y = 3(2)^{x-1} + 4$ ,  
 a) Does the function represent growth or decay? \_\_\_\_\_  
 b) What is the equation of the asymptote? \_\_\_\_\_  
 c) Describe the transformations that occur: \_\_\_\_\_

22) Given the function  $y = 5(2)^{x+2} - 3$   
 a) Does the function represent growth or decay? \_\_\_\_\_  
 b) What is the equation of the asymptote? \_\_\_\_\_  
 c) Describe the transformations that occur: \_\_\_\_\_

Feb 15-11:10 AM